

1. Koliko je ura?

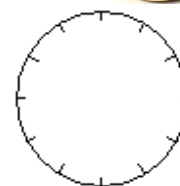
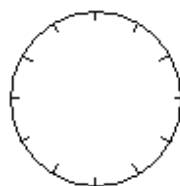
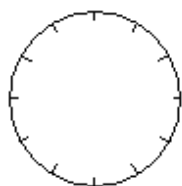
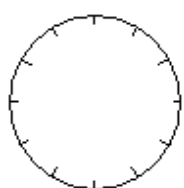




2. Pretvori kot v zgledu.

15.33	22.15		14.28		17.55	
3.33		4.10		7.45		11.36

3. Vriši uro.

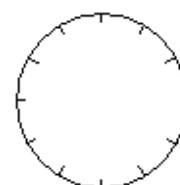
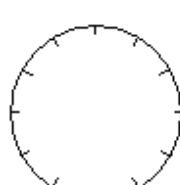
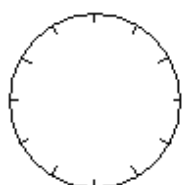
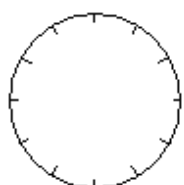


7.00

3.15

8.30

10.45



16.47

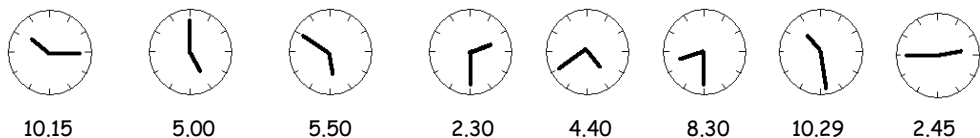
13.55

23.10

19.22

REŠITVE

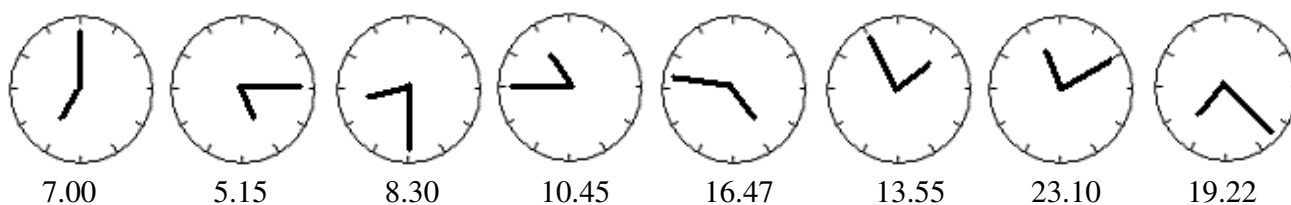
1. Koliko je ura?



2. Pretvori kot v zgladu.

15.33	22.15	16.10	14.28	19.45	17.55	23.36
3.33	10.15	4.10	2.28	7.45	5.55	11.36

3. Vriši uro.



4. Pa še mala nagrada.

